



# INDIAN SCHOOL AL WADI AL KABIR

DEPARTMENT OF MATHEMATICS (2023-2024)

TOPIC: TIME

RECALL WORKSHEET

RESOURCE PERSON: MS. MANJULA HARINARAYANAN







NAME: \_\_\_\_\_ CLASS: IV SEC: \_\_\_\_\_ DATE: \_\_\_\_\_

**Read the instructions and do as directed.**

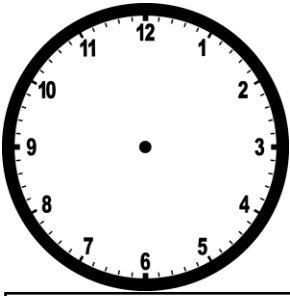
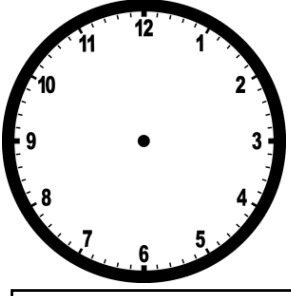
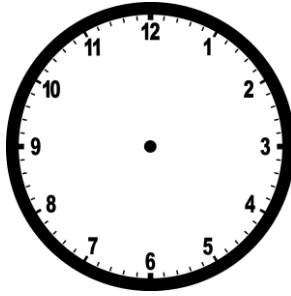
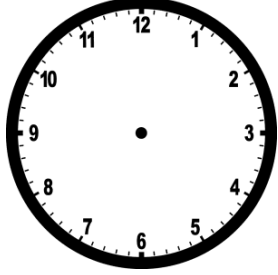
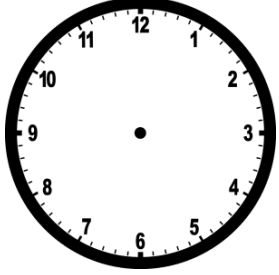
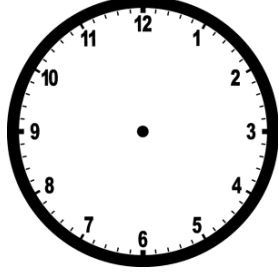
**I. Fill in the blanks with the correct answer.**

- a) The short hand of a clock is the \_\_\_\_\_ hand and the long hand is the \_\_\_\_\_ hand.
- b) There are \_\_\_\_\_ hours in a day.
- c) One hour = \_\_\_\_\_ minutes.
- d) \_\_\_\_\_ months make a year.





**II. Write the time shown by the pictures of the clocks in the space provided.**

a) 	b) 	c) 
_____	_____	_____
d) 	e) 	f) 
_____	_____	_____

**III. Draw the hands on the pictures of clocks to show the time written under each of them.**

 <p data-bbox="256 556 544 625">10:00</p>	 <p data-bbox="670 556 958 625">2:00</p>	 <p data-bbox="1097 556 1385 625">6:00</p>
 <p data-bbox="256 934 544 1024">Half past 8</p>	 <p data-bbox="670 934 958 1024">Quarter to 1</p>	 <p data-bbox="1097 934 1385 1024">Quarter past 7</p>

**IV. Read the given statements and write the time in the box provided.**

 <p data-bbox="337 1165 782 1249">1. Sarah goes to dance class, 2 hours before 6:30.</p> <div data-bbox="381 1281 646 1365" style="border: 1px solid black; width: 163px; height: 40px; margin-left: 153px;"></div>	 <p data-bbox="1104 1165 1409 1291">2. Rahul does his homework at quarter to 5.</p> <div data-bbox="1140 1339 1393 1423" style="border: 1px solid black; width: 156px; height: 40px; margin-left: 197px;"></div>
 <p data-bbox="430 1522 779 1606">3. Sita eats lunch at half past 1.</p> <div data-bbox="430 1663 683 1747" style="border: 1px solid black; width: 156px; height: 40px; margin-left: 167px;"></div>	 <p data-bbox="1006 1522 1404 1606">4. Ali goes to sleep, 3 hours after 6:15.</p> <div data-bbox="1153 1680 1390 1764" style="border: 1px solid black; width: 146px; height: 40px; margin-left: 202px;"></div>